

ELECTROMAGNETIC WAVES

- In an electromagnetic wave, the electric and magnetizing fields are 100 Vm^{-1} and 0.265 Am^{-1} . The maximum energy flow is
a) 26.5 Wm^{-2} b) 36.5 Wm^{-2} c) 46.7 Wm^{-2} d) 765 Wm^{-2}
- X-ray are not used for radar purpose, because they are not
a) Reflected by target b) Partly absorbed by target
c) Electromagnetic waves d) Completely absorbed by target
- If an electromagnetic wave is propagation in a medium with permittivity ϵ and permeability μ , then $\sqrt{\frac{\mu}{\epsilon}}$ is the
a) Intrinsic impedance of the medium b) Square of the refractive index of the medium
c) Refractive index of the medium d) Energy density of the medium
- An earth orbiting satellite has solar energy collecting panel with total area 5 m^2 . If solar radiations are perpendicular and completely absorbed, the average force associated with the radiation pressure is (Solar constant = 1.4 kWm^{-2})
a) $2.33 \times 10^{-3} \text{ N}$ b) $2.33 \times 10^{-4} \text{ N}$ c) $2.33 \times 10^{-5} \text{ N}$ d) $2.33 \times 10^{-6} \text{ N}$
- For EM wave propagating along x-axis, $E_{\text{max}} = 30 \text{ Vm}^{-1}$. what is maximum value of magnetic field?
a) 10^{-7} T b) 10^{-8} T c) 10^{-9} T d) 10^{-6} T
- A parallel plate capacitor is charged to $60 \mu\text{C}$. Due to a radioactive source, the plate loss charge at the rate of $1.8 \times 10^{-8} \text{ Cs}^{-1}$. The magnitude of displacement current is
a) $1.8 \times 10^{-8} \text{ Cs}^{-1}$ b) $3.6 \times 10^{-8} \text{ Cs}^{-1}$ c) $4.1 \times 10^{-11} \text{ Cs}^{-1}$ d) $5.7 \times 10^{-12} \text{ Cs}^{-1}$
- If ϵ_0 and μ_0 are the electric permittivity and magnetic permeability of free space and ϵ and μ are the corresponding quantities in the medium, the index of refraction of the medium in terms of above parameter is
a) $\frac{\epsilon\mu}{\epsilon_0\mu_0}$ b) $\left(\frac{\epsilon\mu}{\epsilon_0\mu_0}\right)^{1/2}$ c) $\left(\frac{\epsilon_0\mu_0}{\epsilon\mu}\right)$ d) $\left(\frac{\epsilon_0\mu_0}{\epsilon\mu}\right)^{1/2}$
- According to Maxwell's hypothesis, a changing electric field gives rise to
a) An emf b) Electric current c) Magnetic field d) Pressure radiant
- Electric fields induced by changing magnetic fields are
a) Conservation b) Non-conservation
c) May be conservative or non-conservation d) Nothing can be said depending on the conditions
- The electric field of a plane electromagnetic wave varies with time of amplitude 2 Vm^{-1} propagating along z-axis. The average energy density of the magnetic field is (in Jm^{-3})
a) 13.29×10^{-12} b) 8.86×10^{-12} c) 17.72×10^{-12} d) 4.43×10^{-12}
- The sun delivers 10^4 Wm^{-2} of electromagnetic flux to the earth's surface. The total power that incident on a roof of dimensions 10 m square will be
a) 10^4 W b) 10^5 W c) 10^6 W d) 10^7 W
- Infrared radiation is detected by
a) Spectrometer b) Pyrometer c) Nanometer d) Photometer
- Ground waves have wavelength



- a) Less than 200 m b) Equal to 200 m c) More than 200 m d) All of these
14. A plane Electromagnetic Waves travelling along the X -direction has a wavelength of 3 mm. The variation in the electric field occurs in the Y -direction with an amplitude 66 Vm^{-1} . The equations for the electric and magnetic fields as a function of x and t are respectively
- a) $E_y = 33 \cos \pi \times 10^{11} \left(t - \frac{x}{c} \right),$
 $B_z = 1.1 \times 10^{-7} \cos \pi \times 10^{11} \left(t - \frac{x}{c} \right)$
- b) $E_y = 11 \cos 2\pi \times 10^{11} \left(t - \frac{x}{c} \right),$
 $B_y = 11 \times 10^{-7} \cos 2\pi \times 10^{11} \left(t - \frac{x}{c} \right)$
- c) $E_x = 33 \cos \pi \times 10^{11} \left(t - \frac{x}{c} \right),$
 $B_x = 11 \times 10^{-7} \cos \pi \times 10^{11} \left(t - \frac{x}{c} \right)$
- d) $E_y = 66 \cos 2\pi \times 10^{11} \left(t - \frac{x}{c} \right),$
 $B_z = 2.2 \times 10^{-7} \cos 2\pi \times 10^{11} \left(t - \frac{x}{c} \right)$
15. The frequency 1057 MHz of radiation arising from two close energy levels in hydrogen belongs to
a) Radio waves b) Infrared waves c) Micro waves d) γ - rays
16. Maxwell in his famous equation of electromagnetism introduced the concept
a) AC current b) DC current c) Displacement current d) Impedance
17. In a plane electromagnetic wave electric field varies with time having an amplitude 1 Vm^{-1} . The frequency of wave is $0.5 \times 10^{15} \text{ Hz}$. The wave is propagation along X -axis. What is the average energy density of magnetic field?
a) $1.1 \times 10^{-12} \text{ J m}^{-3}$ b) $2.2 \times 10^{-12} \text{ J m}^{-3}$ c) $3.3 \times 10^{-12} \text{ J m}^{-3}$ d) $4.4 \times 10^{-12} \text{ J m}^{-3}$
18. An Electromagnetic Wave of frequency $\nu = 3.0 \text{ MHz}$ passes from vacuum into a dielectric medium with permittivity $\epsilon = 4.0$. Them
a) Wavelength is doubled and the frequency remains unchanged
b) Wavelength is doubled and frequency becomes half
c) Wavelength is halved and frequency remains unchanged
d) Wavelength and frequency both become unchanged
19. The amplitude of electric field in a parallel beam of light of intensity 4 Wm^{-2} is
a) 40.5 NC^{-1} b) 45.5 NC^{-1} c) 50.5 NC^{-1} d) 55.5 NC^{-1}
20. Assume that a lamp radiates power P uniformly in all directions. What is the magnitude of electric field strength at a distance r from the lamp?
a) $\frac{P}{\pi c \epsilon_0 r^2}$ b) $\frac{P}{2\pi c \epsilon r^2}$ c) $\sqrt{\frac{P}{2\pi \epsilon_0 r^2 c}}$ d) $\sqrt{\frac{P}{\pi \epsilon_0 c r^2}}$
21. The wavelength of infrared rays is of the order of
a) $5 \times 10^{-7} \text{ m}$ b) 10^{-3} m c) Diverge more d) None of these
22. Molybdenum is used as a target element for the production of X-rays because it is
a) Light and can easily defect electrons b) Light and can absorb electrons
c) A heavy element with a high melting point d) An element having high thermal conductivity
23. A charged particle with charge q enters a region of constant, uniform and mutually orthogonal fields \mathbf{E} and \mathbf{B} with a velocity \mathbf{v} perpendicular to both \mathbf{E} and \mathbf{B} , and comes out without any change in magnitude or direction of \mathbf{v} . Then
a) $\mathbf{v} = \mathbf{E} \times \mathbf{B}/B^2$ b) $\mathbf{v} = \mathbf{B} \times \mathbf{E}/B^2$ c) $\mathbf{v} = \mathbf{E} \times \mathbf{B}/E^2$ d) $\mathbf{v} = \mathbf{B} \times \mathbf{E}/E^2$
24. If v_s, v_x and v_m are the speeds of gamma rays, X-rays and microwaves respectively in vacuum, then
a) $v_s > v_x > v_m$ b) $v_s < v_x < v_m$ c) $v_s < v_x < v_m$ d) $v_s = v_x = v_m$
25. The small ozone layer on top of the atmosphere is crucial for human survival because it



- a) Has ions b) Reflects radio signals c) Absorbs UV rays d) Reflects IR rays
26. Television signals reach us only through the ground waves. The range R related with the transmitter height h is in proportion to
a) h b) $h^{1/2}$ c) $h^{-1/2}$ d) h^{-1}
27. In a plane electromagnetic wave propagating in space has an electric field of amplitude $9 \times 10^3 \text{ Vm}^{-1}$, then the amplitude of the magnetic field is
a) $2.7 \times 10^{12} \text{ T}$ b) $9.0 \times 10^{-3} \text{ T}$ c) $3.0 \times 10^{-4} \text{ T}$ d) $3.0 \times 10^{-5} \text{ T}$
28. A capacitor having a capacity of 2 pF. Electric field across the capacitor is changing with a value of 10^{12} Vs^{-1} . The displacement current is
a) 2 A b) 4 A c) 6 A d) 10 A
29. If 150 J of energy is incident on area 2 m². If $Q_r = 15 \text{ J}$, coefficient of absorption is 0.6, then amount of energy transmitted is
a) 50 J b) 45 J c) 40 J d) 30 J
30. Radiations of intensity 0.5 Wm^{-2} are striking a metal plate. The pressure on the plate is
a) $0.166 \times 10^{-8} \text{ Nm}^{-2}$ b) $0.332 \times 10^{-8} \text{ Nm}^{-2}$ c) $0.111 \times 10^{-8} \text{ Nm}^{-2}$ d) $0.083 \times 10^{-8} \text{ Nm}^{-2}$
31. A charged particles oscillates about its mean equilibrium position with a frequency of 10^9 Hz . Frequency of the Electromagnetic Waves produced by the oscillator is
a) 10 Hz b) 10^5 Hz c) 10^9 Hz d) 10^{10} Hz
32. The unit of expression $\mu_0 \epsilon_0$ are
a) ms^{-1} b) $\text{m}^2 \text{s}^{-2}$ c) $\text{s}^2 \text{m}^{-2}$ d) sm^{-1}
33. A layer of ionosphere does not reflect waves with frequencies greater than 10 MHz; then maximum electron density in this layer is
a) $1.23 \times 10^{11} \text{ m}^{-3}$ b) $1.23 \times 10^{10} \text{ m}^{-3}$ c) $12.3 \times 10^{10} \text{ m}^{-3}$ d) $1.23 \times 10^{12} \text{ m}^{-3}$
34. A point source of Electromagnetic radiation has an average power output of 1500 W. The maximum value of electric field at a distance of 3 m from this source in Vm^{-1} is
a) 500 b) 100 c) $\frac{500}{3}$ d) $\frac{250}{3}$
35. A. The wavelength of microwaves is greater than that of UV-rays.
B. The wavelength of IR rays is lesser than that of UV-rays.
C. The wavelength of microwaves is lesser than that of IR-rays.
D. Gamma rays have shortest wavelength in the Electromagnetic Spectrum.
Of the above statements
a) A and B are true b) B and C are true
c) C and D are true d) A and D are true
36. If μ_0 is permeability of free space and ϵ_0 is permittivity of free space, the speed of light in vacuum is given by
a) $\sqrt{\mu_0 \epsilon_0}$ b) $\sqrt{\frac{\mu_0}{\epsilon_0}}$ c) $\sqrt{\frac{1}{\mu_0 \epsilon_0}}$ d) $\sqrt{\frac{\epsilon_0}{\mu_0}}$
37. A plane electromagnetic wave of intensity 10 Wm^{-2} strikes a small mirror of area 20 cm^2 , held perpendicular to the approaching wave. The radiation force on the mirror will be
a) $6.6 \times 10^{-11} \text{ N}$ b) $1.33 \times 10^{-11} \text{ N}$ c) $1.33 \times 10^{-10} \text{ N}$ d) $6.6 \times 10^{-10} \text{ N}$
38. A plane Electromagnetic Waves travels in free space along x -axis. At a particular point in space, the electric field along y -axis is 9.3 Vm^{-1} . The magnetic induction is
a) $3.1 \times 10^{-8} \text{ T}$ b) $3 \times 10^{-5} \text{ T}$ c) $3 \times 10^{-6} \text{ T}$ d) $9.3 \times 10^{-6} \text{ T}$
39. Clouds are contained in a layer from the earth's surface, which is called
a) Troposphere b) Stratosphere c) Mesosphere d) Ionosphere
40. The correct sequence of the increasing wavelength of the given radiation sources is

- a) Radioactive sources, X-ray tube, crystal oscillator, b) Radioactive source, X-ray tube, sodium vapour sodium vapour lamp lamp, crystal oscillator
- c) X-ray tube, radioactive source, crystal oscillator, d) X-ray tube, crystal oscillator, radioactive source, sodium vapour lamp sodium vapour lamp
41. An electromagnetic wave going through vacuum is described by
 $E = E_0 \sin(kx - \omega t); B = B_0 \sin(kx - \omega t)$
 Which of the following equation is true?
 a) $E_0 k = B_0 \omega$ b) $E_0 \omega = B_0 k$ c) $E_0 B_0 = \omega k$ d) None of these
42. If alpha, beta and gamma rays carry same momentum, which has the longest wavelength?
 a) Alpha rays b) Beta rays
 c) Gamma rays d) None, all have same wavelength
43. The curve drawn between velocity and frequency of a photon in vacuum will be
 a) Straight line parallel to frequency axis b) Straight line parallel to velocity axis
 c) Straight line passing through origin and making angle of 45° with frequency axis d) Hyperbola
44. An Electromagnetic Wave has
 a) Electric vector only
 b) Magnetic vector only
 c) Electric and Magnetic vector Perpendicular to each other
 d) Neither the Electric vector nor the Magnetic vector
45. An electromagnetic radiation has an energy of 13.2 keV. Then the radiation belongs to the region of
 a) Visible light b) Ultraviolet c) Infrared d) X-ray
46. The electric field of plane electromagnetic wave in vacuum is represented by $\vec{E}_x = 0; \vec{E}_y = 0.5 \cos[2\pi \times 10^8(t - x/c)]; \vec{E}_z = 0$
 What is the direction of propagation of electromagnetic waves?
 a) Along $x - z$ direction b) Along y -direction
 c) Along x -direction d) A long $y - z$ direction
47. An expression for the magnetic field strength B at the point between the capacitor plates indicates in figure express B in terms of the rate of change of the electric field strength $ie, dE/dt$ between the plates
 a) $\frac{\mu_0 i}{2\pi r}$ b) $\frac{\epsilon_0 \mu_0 r}{2} dE/dt$ c) Zero d) $\frac{\mu_0 i}{2r}$
48. The temperature variation in the region of stratosphere lies from
 a) 290 K to 220 K b) 220 K to 280 K c) 220 K to 380 K d) 180 K to 700 K
49. Which is having minimum wavelength?
 a) X-rays b) Ultraviolet rays c) γ -rays d) Cosmic rays
50. The voltage applied across an X-ray tube is nearly equal to
 a) 10 V b) 100 V c) 1000 V d) 10,000 V
51. Given the wavefunction (in SI units) for a wave to be $\psi_{(x,t)} = 10^3 \sin \pi(3 \times 10^6 x - 9 \times 10^{14} t)$ The speed of the wave is
 a) $9 \times 10^{14} \text{ ms}^{-1}$ b) $3 \times 10^8 \text{ ms}^{-1}$ c) $3 \times 10^6 \text{ ms}^{-1}$ d) $3 \times 10^7 \text{ ms}^{-1}$
52. The ozone layer of the atmosphere lies in the region called
 a) Troposphere b) Stratosphere c) Mesosphere d) Ionosphere
53. Solar radiation is
 a) Transverse Electromagnetic wave b) Longitudinal Electromagnetic wave
 c) Stationary wave d) None of the above
54. Dimensions of $\frac{1}{\mu_0 \epsilon_0}$, where symbols have their usual meanings, are
 a) $[L^{-1}T]$ b) $[L^{-2}T^2]$ c) $[L^2T^{-2}]$ d) $[LT^{-1}]$
55. Which of the following shows green house effect?
 a) Ultraviolet rays b) Infrared rays c) X-rays d) None of these



56. The speed of electromagnetic Wave in vacuum depends upon the source radiation. It
 a) Increases as we move from γ – rays to radio waves
 b) Decreases as we move from γ – rays to radio waves
 c) Is same for all of them
 d) None of the above
57. The wave of wavelength 5900 \AA emitted by any atom or molecule must have some finite total length which is known as the coherence length. For sodium light, this length is 2.4 cm. The number of oscillations in this length will be
 a) 4.068×10^8 b) 4.068×10^7 c) 4.068×10^6 d) 4.068×10^5
58. The average value of electric energy density in an Electromagnetic Waves is (E_0 is peak value)
 a) $\frac{1}{2} \epsilon_0 E_0^2$ b) $\frac{E_0^2}{2\epsilon_0}$ c) $\epsilon_0 E_0^2$ d) $\frac{1}{4} \epsilon_0 E_0^2$
59. The maximum distance upto which TV transmission from a TV tower of height h can be received is proportional to
 a) $h^{1/2}$ b) h c) $h^{3/2}$ d) h^2
60. The dielectric constant of air is 1.006. The speed of Electromagnetic Wave travelling in air is $a \times 10^8 \text{ ms}^{-1}$, where a is about
 a) 3 b) 3.88 c) 2.5 d) 3.2
61. If ϵ_0 and μ_0 represent the permittivity and permeability of vacuum and ϵ and μ represent the permittivity and permeability of medium, then refractive index of the medium is given by
 a) $\sqrt{\frac{\mu_0 \epsilon_0}{\mu \epsilon}}$ b) $\sqrt{\frac{\mu \epsilon}{\mu_0 \epsilon_0}}$ c) $\sqrt{\frac{\mu}{\mu_0 \epsilon_0}}$ d) $\sqrt{\frac{\mu_0 \epsilon_0}{\mu}}$
62. The magnetic field between the plate of a capacitor where $r > R$ is given by (where r is the distance from the axis of plates and R is the radius of each plate of capacitor)
 a) $\frac{\mu_0 i_D r}{2\pi R^2}$ b) $\frac{\mu_0 i_D}{2\pi R}$ c) $\frac{\mu_0 i_D}{2\pi r}$ d) Zero
63. The amplitude of the magnetic field part of a harmonic Electromagnetic Wave in vacuum is $B_0 = 510 \text{ nT}$. What is the amplitude of the electric field part of the wave?
 a) 140 NC^{-1} b) 153 NC^{-1} c) 163 NC^{-1} d) 133 NC^{-1}
64. In an Electromagnetic Wave, direction of propagation is in the direction of
 a) \mathbf{E} b) \mathbf{B} c) $\mathbf{E} \times \mathbf{B}$ d) None of these
65. Consider the following two statements regarding a linearly polarized plane electromagnetic wave
 (i) Electric field and the magnetic field have equal average values
 (ii) Electric energy and the magnetic energy have equal average values
 a) (i) is true b) (ii) is true c) Both are true d) Both are false
66. A radiation of 200 W is incident on a surface which is 60% reflecting and 40% absorbing. The total force on the surface is
 a) $1.07 \times 10^{-6} \text{ N}$ b) $1.3 \times 10^{-6} \text{ N}$ c) $1.07 \times 10^{-7} \text{ N}$ d) $1.03 \times 10^{-7} \text{ N}$
67. An electric field \vec{E} and magnetic field \vec{B} exist in a region. If these fields are not perpendicular to each other, then the electromagnetic wave
 a) Will not pass through the region b) Will pass through region
 c) May pass through the region d) Nothing is definite
68. A radiowave has a maximum magnetic field induction of 10^{-4} T on arrival at a receiving antenna. The maximum electric field intensity of such a wave is
 a) Zero b) $3 \times 10^4 \text{ Vm}^{-1}$ c) $5.8 \times 10^{-4} \text{ T}$ d) $3.0 \times 10^{-5} \text{ T}$
69. According to Maxwell's hypothesis, changing electric field gives rise to
 a) Magnetic field b) Pressure gradient c) Charge d) Voltage
70. The rms value of the electric field of the light coming from the sun is 720 NC^{-1} . The average total energy density of the Electromagnetic Wave is

- a) $4.58 \times 10^{-6} \text{ Jm}^{-3}$ b) $6.37 \times 10^{-9} \text{ Jm}^{-3}$ c) $81.35 \times 10^{-12} \text{ Jm}^{-3}$ d) $3.3 \times 10^{-3} \text{ Jm}^{-3}$
71. The magnetic field of an Electromagnetic Wave is given by
 $B_y = 3 \times 10^{-7} \sin(10^3x + 6.29 \times 10^{12}t)$.
 The wavelength of the Electromagnetic Wave is
 a) 6.28 cm b) 3.14 cm c) 0.63 cm d) 0.32 cm
72. The shortest wavelength of X-rays emitted from an X-rays tube depends upon
 a) Nature of the gas in the tube b) Voltage applied to tube
 c) Current in the tube d) Nature of target of the tube
73. Hydrogen atom does not emit X-rays because
 a) It has signal electron b) It has no neutron
 c) It has single neutron d) Its energy levels are too close to each other
74. In a medium of dielectric constant K , the electric field is \mathbf{E} . If ϵ_0 is permittivity of the free space, the electric displacement vector is
 a) $\frac{K\mathbf{E}}{\epsilon_0}$ b) $\frac{\mathbf{E}}{K\epsilon_0}$ c) $\frac{\epsilon_0\mathbf{E}}{K}$ d) $K\epsilon_0\mathbf{E}$
75. The wavelength of X-rays lies between
 a) Maximum to finite limits b) Minimum to certain limits
 c) Minimum to infinite limits d) Infinite to finite limits
76. The electric field (in NC^{-1}) in an electromagnetic wave is given by $E = 50 \sin \omega(t - x/c)$.
 The energy stored in a cylinder of cross-section 10 cm^2 and length 100 cm, along the x -axis will be
 a) $5.5 \times 10^{-12} \text{ J}$ b) $1.1 \times 10^{-11} \text{ J}$ c) $2.2 \times 10^{-11} \text{ J}$ d) $1.65 \times 10^{-11} \text{ J}$
77. All components of the Electromagnetic Spectrum in vacuum have the same
 a) Energy b) Velocity c) Wavelength d) Frequency
78. Which of the following has zero average value in a plane electromagnetic wave?
 a) Kinetic energy b) Magnetic field c) Electric field d) Both (b) and (c)
79. A large parallel plate capacitor, whose plates have an area of 1 m^2 and are separated from each other by 1 mm, is being charged at a rate of 25 Vs^{-1} . If the dielectric between the plates has the dielectric constant 10, then the displacement current at this instant is
 a) $25 \mu\text{A}$ b) $11 \mu\text{A}$ c) $2.2 \mu\text{A}$ d) $1.1 \mu\text{A}$
80. The atmosphere between the heights of 50 km and 80 km is called
 a) Mesosphere b) Ozonosphere c) Ionosphere d) Troposphere
81. Instantaneous displacement current of 1.0 A in the space between the parallel plate of $1 \mu\text{F}$ capacitor can be established by changing potential difference of
 a) 10^{-6} Vs^{-1} b) 10^6 Vs^{-1} c) 1 Vs^{-1} d) 0.1 Vs^{-1}
82. In a phase electromagnetic wave, the electric field oscillates sinusoidally at a frequency of $2.0 \times 10^{10} \text{ Hz}$ and amplitude 48 Vm^{-1} . The wavelength of the wave is
 a) $24 \times 10^{-10} \text{ m}$ b) $1.5 \times 10^{-2} \text{ m}$ c) $4.16 \times 10^8 \text{ m}$ d) $3 \times 10^8 \text{ m}$
83. Velocity of Electromagnetic Waves in a medium depends upon
 a) Thermal properties of medium
 b) Mechanical and electrical properties of medium
 c) electrical and magnetic properties of the medium
 d) Mechanical and magnetic properties of the medium
84. The electric field for a plane electromagnetic wave travelling in the positive z -direction is represented by which one of the following?
 a) $\hat{\mathbf{k}}_1 E_0 e^i(kz - \omega t + \phi)$ b) $\hat{\mathbf{i}}_1 E_0 e^i(kx - \omega t + \phi)$
 c) $\hat{\mathbf{i}}_1 E_0 e^i(kz + \omega t + \phi)$ d) $\hat{\mathbf{k}}_1 E_0 e^i(kz + \omega t + \phi)$
85. The fact that radiosignals reach the earth from outside the atmosphere, was discovered accidentally by
 a) K. G. Jansky b) Millikan c) Aryabhata d) Prof. Kanu
86. The electric field of an electromagnetic wave travelling through vacuum is given by the equation $E = E_0 \sin(kx - \omega t)$. The quantity that is independent of wavelength is



- a) $\frac{k}{\omega}$ b) $k\omega$ c) ω d) k
87. X-rays are produced by jumping of
 a) Electrons from lower to higher energy orbit of atom b) Electrons from higher to lower energy orbit of atom
 c) Protons from lower to higher energy orbit of nucleus d) Proton from higher to lower energy orbit of nucleus
88. The magnetic field between the plates of radius 12 cm separated by distance of 4 mm of a parallel plate capacitor of capacitance 100 pF along the axis of plates having conduction current of 0.15 A is
 a) Zero b) 1.5 T c) 15 T d) 0.15 T
89. The magnetic field between the plate of a capacitor when $r < R$ is given by
 a) $\frac{\mu_0 i_D r}{2\pi R^2}$ b) $\frac{\mu_0 i_D}{2\pi R}$ c) $\frac{\mu_0 i_D}{2\pi r}$ d) Zero
90. The ozone layer absorbs
 a) Infrared radiations b) Ultraviolet radiations
 c) X-rays d) γ -rays
91. Out of the following electromagnetic radiation, which has the shortest wavelength?
 a) Radiowaves b) Infrared c) Ultraviolet d) X-rays
92. A circular ring of radius r is placed in a homogenous magnetic field perpendicular to the plane of the ring. The field B changes with time according to the equation $B = kt$, where k is a constant and t is the time. The electric field in the ring is
 a) $\frac{kr}{4}$ b) $\frac{kr}{3}$ c) $\frac{kr}{2}$ d) $\frac{k}{2r}$
93. A cube of edge a has its edges parallel to x , y and z -axis of rectangular coordinate system. A uniform electric field \vec{E} is parallel to y -axis and a uniform magnetic field is \vec{B} parallel to x -axis. The rate at which flows through each face of the cube is
 a) $\frac{a^2 \cdot EB}{2\mu_0}$ parallel to $x - y$ plane and zero in others b) $\frac{a^2 EB}{\mu_0}$ parallel to $x - y$ plane and zero in others
 c) $\frac{a^2 EB}{2\mu_0}$ from all faces d) $\frac{a^2 EB}{2\mu_0}$ parallel; to $y - z$ faces and zero in others
94. A radar sends the waves towards a distant object and receives the signal reflected by object. These waves are
 a) Sound waves b) Light waves c) Radio waves d) Micro waves
95. A laser beam is sent to the moon and reflected back to earth by a mirror placed on the moon by an astronaut. If the moon is 384000 km from earth, how long does it take the light to make the round trip?
 a) 5 min b) 2.5 min c) 2.5 s d) 500 s
96. A particle of mass 1×10^{-26} kg and charge 1.6×10^{-19} C travelling with a velocity 1.28×10^6 ms⁻¹ along the positive X -axis enters a region in which a uniform electric field \vec{E} and a uniform magnetic field of induction \vec{B} are present. If $\vec{E} = -10.24 \times 10^3 \hat{k}$ NC⁻¹ and $\vec{B} = 8 \times 10^{-2} \hat{j}$ Wbm⁻², the direction of motion of the particles is
 a) Along the positive X -axis b) Along the negative X -axis
 c) At 45° to the positive X -axis d) At 135° to the positive X -axis
97. A radiation of energy E falls normally on a perfectly reflecting surface. The momentum transferred to the surface is
 a) $\frac{E}{c}$ b) $\frac{2E}{c}$ c) Ec d) $\frac{E}{c^2}$
98. Which of the following rays is emitted by a human body?
 a) X-rays b) UV rays c) Visible rays d) IR rays
99. A TV tower has a height of 100 m. How much population is covered by the TV broadcast if the average population density around the tower is 100 km⁻² (radius of the earth = 6.37×10^6 m)
 a) 4 lakh b) 4 billion c) 40,000 d) 40 lakh

100. Radio wave diffract around building although light waves do not. The reason is that radio waves
- a) Travel with speed greater than c b) Have much larger wavelength than light
c) Carry news d) Are not electromagnetic waves
101. The density of air at the top of mesosphere in comparison to that of near the earth's surface is
- a) 10^{-3} times b) 10^{-5} times c) 10^3 times d) 10^5 times
102. A point source of electromagnetic radiation has an average power output of 800 W. The maximum value of electric field at a distance 4.0 m from the source is
- a) 64.7 Vm^{-1} b) 57.8 Vm^{-1} c) 56.72 Vm^{-1} d) 54.77 Vm^{-1}
103. The atmosphere above the height of 80 km is called
- a) Stratosphere b) Troposphere c) Mesosphere d) Ionosphere
104. Height h of transmitter antenna when R is radius of earth to have range d is
- a) $d^2/2R$ b) $\sqrt{2dR}$ c) $2d^2/R$ d) $2R^2/d$
105. Maxwell in his famous equation of electromagnetism introduced the concept of
- a) AC current b) DC current
c) Displacement current d) Impedance
106. The waves which have revolutionized telecommunication in more recent time, are
- a) Micro wave b) Radio waves c) Light waves d) TV waves
107. The charge of a parallel plate capacitor is varying as $q = q_0 \sin 2\pi ft$. The plates are very large and close together (area = A , separation = d). Neglecting edge effects, the displacement current through the capacitor is
- a) $\frac{d}{A\epsilon_0}$ b) $\frac{d}{\epsilon_0} \sin 2\pi ft$ c) $2\pi f q_0 \cos 2\pi ft$ d) $\frac{2\pi f q_0}{\epsilon_0} \cos 2\pi ft$
108. If a source is transmitting electromagnetic wave of frequency $8.2 \times 10^6 \text{ Hz}$, then wavelength of the electromagnetic waves transmitted from the source will be
- a) 36.6 m b) 40.5 m c) 42.3 m d) 50.9 m
109. An electric field of 1500 Vm^{-1} and a magnetic field of 0.40 Wbm^{-2} act on a moving electron. The minimum uniform speed along a straight line the electron could have is
- a) $1.6 \times 10^{15} \text{ ms}^{-1}$ b) $6 \times 10^{16} \text{ ms}^{-1}$ c) $3.75 \times 10^3 \text{ ms}^{-1}$ d) $3.75 \times 10^2 \text{ ms}^{-1}$
110. The energy of X-ray photon is $3.3 \times 10^{-16} \text{ J}$. Its frequency is
- a) $2 \times 10^{19} \text{ Hz}$ b) $5 \times 10^{18} \text{ Hz}$ c) $5 \times 10^{17} \text{ Hz}$ d) $5 \times 10^{16} \text{ Hz}$
111. If a source is transmitting Electromagnetic Waves of frequency $8.196 \times 10^6 \text{ Hz}$, then the wavelength of the Electromagnetic Waves transmitted from the source will be
- a) 5090 cm b) 4050 cm c) 4230 cm d) 3660 cm
112. The phase velocity (v_p) of travelling wave is
- a) $v_p = \frac{\omega}{k}$ b) $v_p = \frac{d\omega}{dk}$ c) $v_p = c$ d) $v_p = \frac{c}{v_g}$
113. If a free electron is placed in the path of a plane electromagnetic wave, it will start moving along
- a) Centre of earth b) Equator of earth c) Magnetic field d) Electric field
114. The energy of X-ray photon is 2200 eV. Its frequency would be
- a) $5.3 \times 10^{16} \text{ Hz}$ b) $5.3 \times 10^{17} \text{ Hz}$ c) $5 \times 10^{17} \text{ Hz}$ d) $5 \times 10^{16} \text{ Hz}$
115. Which of the following relation is correct?
- a) $\sqrt{\epsilon_0 E_0} = \sqrt{\mu_0 B_0}$ b) $\sqrt{\mu_0 \epsilon_0} E_0 = B_0$ c) $E_0 = \sqrt{\mu_0 \epsilon_0} B_0$ d) $\sqrt{\mu_0} E_0 = \sqrt{\epsilon_0} B_0$
116. According to Maxwell's equation the velocity of light in any medium is expressed as
- a) $\frac{1}{\sqrt{\mu_0 \epsilon_0}}$ b) $\frac{1}{\sqrt{\mu \epsilon}}$ c) $\sqrt{\mu/\epsilon}$ d) $\sqrt{\frac{\mu_0}{\epsilon}}$
117. Electromagnetic Waves of frequencies higher than $9\sqrt{2} \text{ MHz}$ are found to be reflected by the ionosphere on a particular day at a place. The maximum electron density in the ionosphere is
- a) $\sqrt{5} \times 10^{12} \text{ m}^{-3}$ b) $\sqrt{2} \times 10^{12} \text{ m}^{-3}$ c) $2 \times 10^{12} \text{ m}^{-3}$ d) $5 \times 10^{12} \text{ m}^{-3}$
118. An electromagnetic wave, going through vacuum is described by $E = E_0 \sin(kx - \omega t)$

Which of the following is independent of wavelength?

- a) k b) ω c) k/ω d) $k\omega$

119. Which of the following is absorbed by the ozone layer?

- a) Only gamma rays b) Visible light c) Radio Waves d) Ultraviolet rays

120. If the earth did not have atmosphere, its surface temperature on a day time would be

- a) Higher b) Lower c) Same as now d) Not sure

121. A perfectly reflecting mirror has an area of 1 cm^2 Light energy is allowed to fall on it for 1h at the rate of 10 Wcm^{-2} . The force that acts on the mirror is

- a) $3.35 \times 10^{-8} \text{ N}$ b) $6.7 \times 10^{-8} \text{ N}$ c) $1.34 \times 10^{-7} \text{ N}$ d) $2.4 \times 10^{-4} \text{ N}$

122. A radio wave of frequency 90 MHz enters a ferrite rod. If $\epsilon_r = 10^3$ and $\mu_r = 10$, then the velocity and wavelength of the wave in ferrite are

- a) $3 \times 10^8 \text{ ms}^{-1}; 3.33 \times 10^{-2} \text{ m}$ b) $3 \times 10^6 \text{ ms}^{-1}; 3.33 \times 10^{-2} \text{ m}$
 c) $3 \times 10^8 \text{ ms}^{-1}; 3.33 \times 10^{-1} \text{ m}$ d) $3 \times 10^7 \text{ ms}^{-1}; 3.33 \times 10^{-3} \text{ m}$

123. The Electromagnetic theory of light failed to explain

- a) Photoelectric effect b) Polarization c) Diffraction d) Interference

124. Which of the following electromagnetic waves have the longest wavelength?

- a) Heat waves b) Light waves c) Radio waves d) Ultraviolet waves

125. The oscillating electric and magnetic field vectors of electromagnetic wave are oriented along

- a) The same direction and in phase
 b) The same direction but have a phase difference of 90°
 c) Mutually perpendicular directions and are in phase
 d) Mutually perpendicular directions but has a phase difference of 90°

126. Electromagnetic Waves can be deflected by

- a) Electric field only b) Magnetic field only
 c) Both (a) and (b) d) None of these

127. The sun delivers 10^3 Wm^{-2} of Electromagnetic flux on the earth's surface. The total power that is incident on a roof of dimensions $6\text{m} \times 30\text{m}$, is

- a) $1.8 \times 10^5 \text{ W}$ b) $7.2 \times 10^5 \text{ W}$ c) $0.9 \times 10^5 \text{ W}$ d) $4.5 \times 10^5 \text{ W}$

128. What is order of energy of X-rays (E_X), radio waves (E_R) and microwave (E_M)?

- a) $E_X < E_R < E_M$ b) $E_X < E_M > E_R$ c) $E_M > E_X > E_R$ d) $E_M < E_R < E_X$

129. A plane Electromagnetic Wave of frequency 30 MHz travels in free space along the x -direction. The electric field component of the wave at a particular point of space and time $E=6 \text{ Vm}^{-1}$ along y -direction. Its magnetic field component B at this point would be

- a) $2 \times 10^{-8} \text{ T}$ along z -direction b) $6 \times 10^{-8} \text{ T}$ along x -direction
 c) $2 \times 10^{-8} \text{ T}$ along y -direction d) $6 \times 10^{-8} \text{ T}$ along z -direction

130. Ozone layer blocks the radiations of wavelength

- a) Less than $3 \times 10^{-7} \text{ m}$ b) Equal to $3 \times 10^{-7} \text{ m}$
 c) More than $3 \times 10^{-7} \text{ m}$ d) All of the above

131. If c is the speed of Electromagnetic Waves in vacuum, its speed in a medium of dielectric constant K and relative permeability μ , is

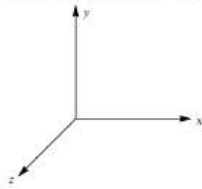
- a) $v = \frac{1}{\sqrt{\mu_r, K}}$ b) $v = c \sqrt{\mu_r, K}$ c) $v = \frac{c}{\sqrt{\mu_r, K}}$ d) $v = \frac{K}{\sqrt{\mu_r, c}}$

132. The Maxwell's four equations are written as

- (i) $\oint \vec{E} \cdot d\vec{s} = q/\epsilon_0$
 (ii) $\oint \vec{B} \cdot d\vec{s} = 0$
 (iii) $\oint \vec{E} \cdot d\vec{l} = -\frac{d}{dt} \oint \vec{B} \cdot d\vec{s}$
 (iv) $\oint \vec{B} \cdot d\vec{l} = \mu_0 I + \mu_0 \epsilon_0 \frac{d}{dt} \oint \vec{E} \cdot d\vec{s}$

The equation which have sources of \vec{E} and \vec{B} are

- a) (i), (ii), (iii) b) (i), (ii) c) (i) and (iii) only d) (i) and (iv) only
133. The waves which are reflected back to the earth by ionosphere is
 a) Ground wave b) Sky wave c) Space wave d) All of these
134. The relation between electric field vector \mathbf{E} , the displacement vector \mathbf{D} and the polarization vector \mathbf{P} for a dielectric placed in electric field \mathbf{E} is given by
 a) $\mathbf{P} = \epsilon_0 \mathbf{E} + \mathbf{D}$ b) $\mathbf{P} = \mathbf{D} + \mathbf{E}$ c) $\mathbf{D} = \epsilon_0 \mathbf{E} + \mathbf{P}$ d) $\mathbf{E} = \mathbf{D} + \mathbf{P}$
135. The refractive index and the permeability of a medium are respectively 1.5 and $5 \times 10^{-7} \text{Hm}^{-1}$. The relative permittivity of the medium is nearly
 a) 25 b) 15 c) 81 d) 6
136. If $\vec{\mathbf{E}}$ is an electric field and $\vec{\mathbf{B}}$ is the magnetic induction then the energy flow per unit area per unit time in an electromagnetic field is given by
 a) $\vec{\mathbf{E}} \times \vec{\mathbf{B}}$ b) $\vec{\mathbf{E}} \cdot \vec{\mathbf{B}}$ c) $E^2 + B^2$ d) E/B
137. Light wave is travelling along y -direction. If the corresponding \mathbf{E} vector at any time is along the x -axis, the direction of \mathbf{B} vector at that time is along



- a) y -axis b) x -axis c) $+z$ -axis d) $-z$ -axis

ELECTROMAGNETIC WAVES

: ANSWER KEY :

1)	a	2)	a	3)	a	4)	c	73)	a	74)	d	75)	b	76)	b
5)	a	6)	a	7)	b	8)	c	77)	b	78)	d	79)	c	80)	a
9)	b	10)	b	11)	c	12)	b	81)	b	82)	b	83)	c	84)	b
13)	c	14)	d	15)	b	16)	c	85)	a	86)	a	87)	b	88)	a
17)	b	18)	c	19)	d	20)	c	89)	a	90)	b	91)	d	92)	c
21)	c	22)	c	23)	a	24)	d	93)	b	94)	d	95)	c	96)	a
25)	c	26)	b	27)	d	28)	a	97)	b	98)	d	99)	d	100)	b
29)	b	30)	a	31)	c	32)	c	101)	b	102)	d	103)	d	104)	a
33)	a	34)	a	35)	d	36)	c	105)	c	106)	a	107)	c	108)	a
37)	c	38)	a	39)	a	40)	b	109)	c	110)	c	111)	d	112)	a
41)	a	42)	d	43)	b	44)	c	113)	d	114)	b	115)	b	116)	b
45)	d	46)	c	47)	b	48)	b	117)	d	118)	c	119)	d	120)	a
49)	c	50)	d	51)	b	52)	b	121)	b	122)	b	123)	a	124)	c
53)	a	54)	c	55)	b	56)	c	125)	c	126)	d	127)	a	128)	b
57)	c	58)	d	59)	a	60)	a	129)	a	130)	b	131)	c	132)	d
61)	b	62)	c	63)	b	64)	c	133)	a	134)	c	135)	d	136)	a
65)	c	66)	a	67)	c	68)	b	137)	c						
69)	a	70)	a	71)	c	72)	b								



ELECTROMAGNETIC WAVES

: HINTS AND SOLUTIONS :

- 1 **(a)**
Here, amplitude of electric field, $E_0 = 100 \text{ Vm}^{-1}$;
amplitude of magnetic field, $B_0 = 0.265 \text{ Am}^{-1}$. We
know that the maximum rate of energy flow
 $S = E_0 \times B_0 = 100 \times 0.265 = 26.5 \text{ Wm}^{-2}$
- 2 **(a)**
X-rays being of high energy radiations, penetrate
the target and hence are not reflected back
- 3 **(a)**
 $\sqrt{\frac{\mu}{\epsilon}}$ has the dimensions of resistance, hence it is
called the intrinsic impedance of the medium
- 4 **(c)**
Power = $I \times \text{area} = (1.4 \times 10^3) \times 5$
Force $F = \frac{\text{Power}}{c} = \frac{1.4 \times 10^3 \times 5}{3 \times 10^8}$
 $= 2.33 \times 10^{-5} \text{ N}$
- 5 **(a)**
The amplitude of the electric and magnetic fields
in free space are related by $\frac{E_0}{B_0} = c$
Here, $E_0 = 30 \text{ Vm}^{-1}$, $c = 3 \times 10^8 \text{ ms}^{-1}$
 $\therefore B_0 = \frac{E_0}{c} = \frac{30}{3 \times 10^8} = 10^{-7} \text{ T}$
- 6 **(a)**
Displacement current is given by
 $I_d = \frac{dq}{dt} = 1.8 \times 10^{-8} \text{ Cs}^{-1}$
- 7 **(b)**
Velocity of light in vacuum
 $c = \frac{1}{\sqrt{\mu_0 \epsilon_0}}$
velocity of light in medium
 $v = \frac{1}{\sqrt{\mu \epsilon}}$
 $\therefore \mu = \frac{c}{v} = \left(\frac{\mu \epsilon}{\mu_0 \epsilon_0} \right)^{1/2}$
- 8 **(c)**
According to Maxwell, a changing electric field is a
source of magnetic field
- 9 **(b)**
The electric field induced by changing magnetic
field depends upon the rate of change of magnetic
flux, hence it is non-conservative
- 10 **(b)**
 $U = \frac{1}{2} \times \frac{1}{2} \epsilon_0 E^2 = \frac{1}{2} \times \frac{1}{2} \times 8.85 \times 10^{-12} \times (2)^2$
 $= 8.85 \times 10^{-12} \text{ Jm}^{-3}$
- 11 **(c)**
Total power = solar constant \times area
 $= 10^4 \times (10 \times 10) = 10^6 \text{ W}$
- 12 **(b)**
Infrared radiations are detected by pyrometer
- 14 **(d)**
The equation of electric field occurring in Y -
direction
$$E_y = 66 \cos 2\pi \times 10^{11} \left(t - \frac{x}{c} \right)$$

Therefore, for the magnetic field in Z -direction
$$B_z = \frac{E_y}{c}$$

$$= \left(\frac{66}{3 \times 10^8} \right) \cos 2\pi \times 10^{11} \left(t - \frac{x}{c} \right)$$

$$= 22 \times 10^{-8} \cos 2\pi \times 10^{11} \left(t - \frac{x}{c} \right)$$

$$= 22 \times 10^{-7} \cos 2\pi \times 10^{11} \left(t - \frac{x}{c} \right)$$
- 17 **(b)**
In an electromagnetic wave, the average energy
density of magnetic field $\mu_B =$ average energy
density of electric field $v_E = \frac{1}{4} \epsilon_0 E_0^2$
 $= \frac{1}{4} \times (8.85 \times 10^{-12}) \times 1^2$
 $= 2.21 \times 10^{-12} \text{ Jm}^{-3}$
- 18 **(c)**
In vacuum, $\epsilon_0 = 1$
In medium, $\epsilon = 4$
So, refractive index
$$\mu = \sqrt{\epsilon / \epsilon_0} = \sqrt{4/1} = 2$$

wavelength $\lambda' = \frac{\lambda}{\mu} = \frac{\lambda}{2}$
and wave velocity $v = \frac{c}{\mu} = \frac{c}{2}$

Hence, it is clear that wavelength and velocity will become half but frequency remains unchanged when the wave is passing through any medium.

19 (d)

$$l = \frac{1}{2} \epsilon_0 E_0^2 c$$

$$\text{or } E_2 = \sqrt{\frac{2l}{\epsilon_0 c}}$$

$$= \sqrt{\frac{2 \times 4}{(8.85 \times 10^{-12}) \times (3 \times 10^8)}} = 55.5 \text{ NC}^{-1}$$

20 (c)

$$\text{Intensity } I = \frac{\text{pressure}}{\text{area}} = \frac{p}{4\pi r^2}$$

= average energy density \times velocity

$$= \frac{1}{2} \epsilon_0 E_0^2 c$$

$$\therefore E_0 = \sqrt{\frac{2P}{4\pi\epsilon_0 r^2 c}} = \sqrt{\frac{P}{2\pi\epsilon_0 r^2 c}}$$

21 (c)

The wavelengths of infrared rays lie between 7800 Å to 0.004 cm

23 (a)

As \mathbf{v} of charged particle is remaining constant, it means force acting on charged particle is zero.

$$\text{So, } q(\mathbf{v} \times \mathbf{B}) = q\mathbf{E}$$

$$\Rightarrow \mathbf{v} \times \mathbf{B} = \mathbf{E}$$

$$\Rightarrow \mathbf{v} = \frac{\mathbf{E} \times \mathbf{B}}{B^2}$$

26 (b)

Range, $R = \sqrt{2hr}$ where r is the radius of earth so $R \propto h^{1/2}$

27 (d)

$$B_0 = \frac{E_0}{c} = \frac{9 \times 10^3}{3 \times 10^8} = 3 \times 10^{-5} \text{ T}$$

28 (a)

$$i = \frac{dQ}{dt} = \frac{d}{dt} (CV)$$

$$= C \frac{dV}{dt} = 2 \times 10^{-12} \times 10^{12} = 2 \text{ A}$$

29 (b)

When thermal radiations (Q) fall on a body, they are partly reflected, partly absorbed and partly transmitted.

$$Q = Q_a + Q_r + Q_t$$

$$\text{And } \frac{Q_a}{Q} + \frac{Q_r}{Q} + \frac{Q_t}{Q} = a + r + t = 1$$

$$\Rightarrow \frac{15}{150} + 0.6 + x = 1$$

$$\text{or } 0.1 + 0.6 + x = 1$$

$$\text{or } x = 0.3$$

$$\text{Transmitting power, } t = \frac{Q_t}{Q}$$

$$\text{Or } 0.3 = \frac{Q_t}{150}$$

$$\Rightarrow Q_t = 45 \text{ J}$$

30 (a)

Intensity or power per unit area of the radiations,

$$P = pv$$

$$\Rightarrow p = \frac{P}{v}$$

$$= \frac{0.5}{3 \times 10^8} = 0.166 \times 10^{-8} \text{ Nm}^{-2}$$

31 (c)

The frequency of Electromagnetic Waves produced by the oscillator is equal to the frequency of the oscillating particle *ie*, 10^9 Hz.

32 (c)

$$\text{Velocity of light, } c = \frac{1}{\sqrt{\mu_0 \epsilon_0}}$$

$$\text{or } \mu_0 \epsilon_0 = \frac{1}{c^2} = \frac{1}{(\text{ms}^{-1})^2} = \text{s}^2 \text{m}^{-2}$$

35 (d)

The wavelength order of the given types of waves are given below

Waves Wavelength Range (in meter)

$$\text{Gamma rays } 10^{-14} - 10^{-10}$$

$$\text{IR-rays } 7 \times 10^{-7} = 10^{-3}$$

$$\text{UV-rays } 10^{-9} - 4 \times 10^{-7}$$

$$\text{Microwave } 10^{-4} - 10^0$$

Hence, statements (A) and (D) are correct.

36 (c)

The speed of light in vacuum is given by $\sqrt{\frac{1}{\mu_0 \epsilon_0}}$,

where μ_0 is permeability and ϵ_0 is permittivity of free space.

37 (c)

Radiation force = momentum transferred per sec by electromagnetic wave to the mirror

$$= \frac{2S_{\text{av}}A}{c} = \frac{2 \times (10) \times (20 \times 10^{-4})}{(3 \times 10^8)}$$

$$= 1.33 \times 10^{-10} \text{ N}$$

38 (a)

Using the relation

$$c = \frac{E_0}{B_0}$$

$$B_0 = \frac{E_0}{c}$$

$$= \frac{9.3}{3 \times 10^8} = 3.1 \times 10^{-8} \text{ T}$$

40 (b)

Radioactive source, X-ray tube, sodium vapour lamp, crystal oscillator

41 (a)

Use method of dimensions. Equating the dimensions of two sides we note the relation
(a) Is dimensionally correct

42 (d)

On the basis of dual nature of light, Louis de-Broglie suggested that the dual nature is not only of light, but each moving material particle has the dual nature. He assumed a wave to be associated with each moving material particle which is called the matter wave. The wavelength of this wave is determined by the momentum of the particle. If p is the momentum of the particle, the wavelength of the wave associated with it is

$$\lambda = \frac{h}{p}$$

Where h is Planck's constant.

Since, it is given that, alpha, beta and gamma rays carry same momentum, so they will have same wavelength.

43 (b)

Velocity of photon in vacuum is constant for all frequencies

44 (c)

A changing electric field produces a changing magnetic field and *vice-versa* which gives rise to a transverse wave known as Electromagnetic Wave. The time varying electric and magnetic fields are mutually perpendicular to each other and also perpendicular to the direction of propagation of this wave.

45 (d)

$$\begin{aligned} \text{Energy of a photon } E &= \frac{hc}{\lambda} \\ \therefore \text{Wavelength } \lambda &= \frac{hc}{E} \\ &= \frac{6.6 \times 10^{-34} \times 3 \times 10^8}{13.2 \times 10^3 \times 1.6 \times 10^{-19}} \\ &= 0.9375 \times 10^{-10} \text{ m} \\ &= 1 \text{ \AA} \end{aligned}$$

Wavelength range of X-rays is from 10^{-11} m to 10^{-8} m (0.1 \AA to 100 \AA).

Therefore, the given electromagnetic radiation belongs to the X-ray region of electromagnetic spectrum.

46 (c)

Equation second shows that the electromagnetic wave travels along the positive x -axis

47 (b)

$$B = \frac{\mu_0}{4\pi} \frac{2i_D}{r} = \frac{\mu_0}{4\pi} \times \epsilon_0 \frac{d\phi_E}{dt}$$

$$\begin{aligned} &= \frac{\mu_0}{2\pi} \frac{2i_D}{r} = \frac{\mu_0}{4\pi r} \times \epsilon_0 \frac{d\phi_E}{dt} \\ &= \frac{\mu_0 \epsilon_0 \pi r^2 dE}{2\pi r dt} = \frac{\mu_0 \epsilon_0 r dE}{2 dt} \end{aligned}$$

49 (c)

$E = \frac{hc}{\lambda}$; minimum the wavelength, the maximum the energy of a λ ray. Therefore rays have minimum wave length

50 (d)

$$V = \frac{hc}{e\lambda} = \frac{6.6 \times 10^{-34} \times 3 \times 10^8}{1.6 \times 10^{-19} \times 10^{-10}} = 10,000 \text{ V}$$

51 (b)

$$\begin{aligned} \Psi_{(x,t)} &= 10^3 \sin \pi(3 \times 10^6 x - 9 \times 10^{14} t) \\ &= 10^3 \sin 3 \times 10^6 \pi(x - 3 \times 10^8 t) \end{aligned}$$

Comparing it with the relation

$$\begin{aligned} \Psi_{(x,t)} &= a \sin \frac{2\pi}{\lambda} (x - ct); \text{ We note that} \\ c &= 3 \times 10^8 \text{ ms}^{-1} \end{aligned}$$

53 (a)

Solar radiations are transverse Electromagnetic waves. The central core of the sun emits a continuous Electromagnetic Spectrum.

54 (c)

$$\begin{aligned} c &= \frac{1}{\sqrt{\mu_0 \epsilon_0}} \text{ or } \frac{1}{\mu_0 \epsilon_0} = c^2 \\ &= [M^0 L T^{-1}]^2 = [M^0 L^2 T^{-2}] \end{aligned}$$

56 (c)

$$\begin{aligned} \text{Speed of Electromagnetic Waves in vacuum} \\ &= \frac{1}{\sqrt{\mu_0 \epsilon_0}} = \text{constant} \end{aligned}$$

57 (c)

$$\begin{aligned} \text{Number of oscillator in coherence length} \\ &= \frac{l}{\lambda} = \frac{0.024}{5900 \times 10^{-10}} \\ &= 4.068 \times 10^6 \end{aligned}$$

58 (d)

Electric energy density

$$\begin{aligned} u_e &= \frac{1}{2} \epsilon_0 E_{\text{rms}}^2 \\ E_{\text{rms}} &= \frac{E_0}{\sqrt{2}} \\ u_e &= \frac{1}{4} \epsilon_0 E_0^2 \end{aligned}$$

59 (a)

$$d = \sqrt{2hR} \text{ or } d \propto h^{1/2}$$

60 (a)

For an Electromagnetic Wave (in vacuum),

$$\text{Velocity } c = \frac{1}{\sqrt{\mu_0 \epsilon_0}} = 3 \times 10^8 \text{ ms}^{-1}$$

Air acts almost as vacuum, hence

$$a = 3(\text{approx})$$

61 (b)

$$\text{Refractive index} = \frac{c_0}{c} = \frac{1/\sqrt{\mu_0 \epsilon_0}}{1/\sqrt{\mu \epsilon}}$$

$$= \sqrt{\frac{\mu \epsilon}{\mu_0 \epsilon_0}}$$

62 (c)

Using Ampere circuit law,

$$\oint \vec{B} \cdot d\vec{l} = \mu_0 i_D$$

or $B2\pi r = \mu i_D$
or $B = \mu_0 i_D / 2\pi r$

63 (b)

For an EM wave, $\frac{E_0}{B_0} = c$ or $E_0 = cB_0$

$$= 3 \times 10^8 \times 510 \times 10^{-9} \text{ NC}^{-1}$$

$$= 153 \text{ NC}^{-1}$$

64 (c)

The direction of propagation of Electromagnetic Wave is in the plane perpendicular to both \mathbf{E} and \mathbf{B} ie, along $\mathbf{E} \times \mathbf{B}$.

66 (a)

$$F_{\text{total}} + F_{\text{ref}} + F_{\text{abs}}$$

$$= \frac{1.2P}{c} + \frac{0.4P}{c} = \frac{1.6P}{c}$$

$$= \frac{1.6 \times 200}{3 \times 10^8} = 1.07 \times 10^{-6} \text{ N}$$

67 (c)

The electromagnetic wave being packets of energy moving with speed of light may pass through the region

68 (b)

$$E_0 = cB_0 = 3 \times 10^8 \times 10^{-4} = 3 \times 10^4 \text{ Vm}^{-1}$$

69 (a)

From Maxwell's Electromagnetic theory, the Electromagnetic Wave propagation contains electric and magnetic fields vibrating perpendicularly to each other. Hence, changing of electric field gives rise to magnetic field.

70 (a)

$$\text{Total average energy} = \epsilon_0 E_{\text{rms}}^2$$

$$= 8.85 \times 10^{-12} \times (720)^2$$

$$= 4.58 \times 10^{-6} \text{ Jm}^{-3}$$

71 (c)

Given, $B_y = 3 \times 10^{-7} \sin(10^3 x + 6.28 \times 10^{12} t)$.

Comparing with the general equation

$$B_y = B_0 \sin(kx + \omega t)$$

we get $k = 10^3$

or $\frac{2\pi}{\lambda} = 10^3$

$$\Rightarrow \lambda = \frac{2\pi}{10^3}$$

$$= 6.28 \times 10^{-3} \text{ m}$$

$$= 0.63 \text{ cm}$$

72 (b)

$$eV = hc/\lambda$$

Or $\lambda = hc/eV$ ie, $\lambda \propto 1/V$

74 (d)

The electric displacement field is a vector valued \mathbf{D} that accounts for the effects of bound charges within materials. In general \mathbf{D} is given by

$$\mathbf{D} = \epsilon_0 \mathbf{E} + \mathbf{P}$$

When \mathbf{E} is electric field, ϵ_0 the vacuum permittivity and \mathbf{P} the polarization density of the material.

In most ordinary terms

$$\mathbf{D} = \epsilon_0 \mathbf{E}$$

When dielectric is present $\epsilon = K\epsilon_0$

$$\therefore \mathbf{D} = K\epsilon_0 \mathbf{E}$$

75 (b)

According to Daun-Hunt law, the wavelength of X-rays lies between minimum to certain limit

76 (b)

Energy contained in a cylinder

$$U = \text{average energy density} \times \text{volume}$$

$$= \frac{1}{2} \epsilon_0 E_0^2 \times Al$$

$$= \frac{1}{2} \times (8.85 \times 10^{-12}) \times (50)^2 \times (10 \times 10^{-4}) \times 1$$

$$= 1.1 \times 10^{-11} \text{ J}$$

77 (b)

All the component of electromagnetic spectrum have same velocity, ie, $3 \times 10^8 \text{ ms}^{-1}$.

78 (d)

In electromagnetic wave, the average value of electric field or magnetic field is zero

79 (c)

$$C = \frac{\epsilon_0 KA}{d} = \frac{(8.85 \times 10^{-12}) \times 10 \times 1}{10^{-3}}$$

$$= 8.85 \times 10^{-8} \text{ F}$$

$$i = \frac{d}{dt} (CV) = C \frac{dV}{dt} = 8.85 \times 10^{-8} \times 25$$

$$= 2.2 \times 10^{-6} \text{ A}$$

81 (b)

$$\frac{Q}{t} = \frac{CV}{t} \text{ or } i_D = C \left(\frac{V}{t} \right)$$

$$\text{or } \frac{V}{t} = \frac{i_D}{C} = \frac{1.0}{10^{-6}} \text{ Vs}^{-1} = 10^6 \text{ Vs}^{-1}$$

82 (b)

Wavelength, $\lambda = c/v = 3 \times 10^8 / 2 \times 10^{10} = 1.5 \times 10^{-2} \text{ m}$

85 (a)

K. G. Jansky discovered accidentally the radio signals coming from outside the atmosphere and reaching the earth

86 (a)

$$E = E_0 \sin(kx - \omega t)$$

Comparing with standard equation we will get

$$\text{Wavelength} = \frac{k}{\omega}$$

88 (a)

As $B \propto r$, since the point is on the axis, where $r = 0$, so $B = 0$

89 (a)

Consider a loop of radius $r (< R)$ between the two circular plates, placed coaxially with them. The area of the loop $= \pi r^2$

By symmetry magnetic field is equal in magnetic at all points on the loop. If i'_D is the displacement current crossing the loop and i_D is the total

displacement current between plates $i'_D = \frac{i_D r}{R} \times \pi r^2$. Using Ampere Maxwell' law we have, $\oint \vec{B} \cdot d\vec{l} = \mu_0 i'_D$

$$\text{or } 2\pi r = \mu_0 i_D \frac{\pi r^2}{\pi R^2} \text{ or } B = \frac{\mu_0 i_D r}{2\pi R^2}$$

90 (b)

The ozone layer absorbs ultraviolet radiations

91 (d)

The X-rays has the shortest wavelength among the following radiations

92 (c)

$$\oint \vec{E} \cdot d\vec{l} = -\frac{d\phi B}{dt}$$

$$\text{or } E \times 2\pi r = \frac{d}{dt}(Kt \times \pi r^2) = K\pi r^2$$

$$\text{or } E = \frac{Kr}{2}$$

93 (b)

Energy flowing per sec per unit area from a face is $= \frac{1}{\mu_0} [\vec{E} \times \vec{B}]$. It will be in the negative z -direction.

It shows that the energy will be flowing in faces parallel to $x - y$ plane and is zero in all other faces. Total energy flowing per second from a face in $x - y$ plane $= \frac{1}{\mu_0} (EB \sin 90^\circ) a^2 = \frac{EBa^2}{\mu_0}$

94 (d)

Now a days microwaves are used to locate the flying objects by radar

95 (c)

$$t = \frac{2s}{c} = \frac{2 \times 38400 \times 1000}{3 \times 10^8} = 2.5 \text{ s}$$

96 (a)

$$m = 1 \times 10^{-26} \text{ kg}, q = 1.6 \times 10^{-19} \text{ C}, \\ v = 1.28 \times 10^6 \text{ ms}^{-1}$$

$$\text{Electric field } \vec{E} = -1024 \times 10^3 \hat{k} \text{ NC}^{-1}$$

$$\text{Magnetic field } \vec{B} = 8 \times 10^{-2} \hat{j} \text{ Wbm}^{-2}$$

$$\frac{|\vec{E}|}{|\vec{B}|} = \frac{102.4 \times 10^3}{8 \times 10^{-2}} = \frac{10.24 \times 10^6}{8} \\ = 1.28 \times 10^6$$

$$\text{Hence, } |\vec{v}| = \frac{|\vec{E}|}{|\vec{B}|}$$

So, particle will remain undeflected, hence direction of motion of particle is along the positive X -axis.

97 (b)

Initial momentum of surface

$$P_i = \frac{E}{c}$$

Where, c = velocity of light (constant).

Since, the surface is perfectly reflecting, so the same momentum will be reflected completely.

Final momentum

$$P_f = \frac{E}{c} \quad (\text{negative value})$$

\therefore Change in momentum

$$\Delta p = p_f - p_i \\ = -\frac{E}{c} - \frac{E}{c} = -\frac{2E}{c}$$

Thus, momentum transferred to the surface is

$$\Delta p' = |\Delta p| = \frac{2E}{c}$$

98 (d)

Generally, temperature of human body is 37°C , corresponding to which IR and microwave radiations are emitted from the human body

99 (d)

$$d = \sqrt{2hR}$$

Population covered

$$= \pi d^2 \times \text{population density}$$

$$= 3.114 \times (2 \times 0.1 \times 6.37 \times 10^3) \times 1000 \approx 40 \text{ lakh}$$

100 (b)

Diffraction takes places when the wavelength of wave is comparable with the size of the obstacle in path. The wavelength of radio waves is greater than the wavelength of light waves. Therefore, radio waves are diffracted around building

101 (b)

The density of air in mesosphere with height decreases from $1/10^3$ to $1/10^5$ times that due to the surface of earth

102 (d)

$$\text{Intensity of electromagnetic wave is } I = \frac{P_{av}}{4\pi r^2} =$$

$$\frac{E_0^2}{2\mu_0 c}$$

$$\text{or } E_0 = \sqrt{\frac{\mu_0 c P_{\text{av}}}{2\pi r^2}}$$

$$= \sqrt{\frac{(4\pi \times 10^{-7}) \times (3 \times 10^8) \times 800}{2\pi \times (4)^2}}$$

$$= 54.77 \text{ Vm}^{-1}$$

103 (d)

The earth's atmosphere above the height of 80 km up to 400 km is called Ionosphere

104 (a)

$$d = \sqrt{2hR} \text{ or } h = d^2/2R$$

107 (c)

$$i = \frac{dq}{dt} = \frac{d}{dt}(q_0 \sin 2\pi ft) = q_0 2\pi f \cos 2\pi ft$$

108 (a)

$$\text{Here, } \lambda = \frac{c}{\nu} = \frac{3 \times 10^8}{8.2 \times 10^6} = 36.6 \text{ m}$$

109 (c)

$$\text{Here, } E = 1500 \text{ Vm}^{-1}, B = 0.4 \text{ Wbm}^{-2}$$

Minimum speed of electron along the straight line

$$\nu = \frac{E}{B} = \frac{1500}{0.4} = 3750$$

$$= 3.75 \times 10^3 \text{ ms}^{-1}$$

110 (c)

$$\nu = E/h = 3.3 \times 10^{-6} / 6.6 \times 10^{-34}$$

$$= 5 \times 10^{17} \text{ Hz}$$

111 (d)

Given, frequency of EM waves

$$\nu = 8.196 \times 10^6 \text{ Hz}$$

Velocity of EM waves (v) = 3×10^8 m/s

$$\therefore \text{Wavelength of EM waves } \lambda = \frac{v}{\nu}$$

$$= \frac{3 \times 10^8}{8.196 \times 10^6} =$$

$$36.60 \text{ m}$$

$$= 3660 \text{ cm}$$

112 (a)

The phase velocity of a wave is rate at which the phase of the wave propagates in space. This is the speed at which the phase of any one frequency component of the wave travels. For such a component, any given phase of the wave will appear to travel at the phase velocity. It is given in terms of wave's angular velocity ω and wave number k by $v_p = \frac{\omega}{k}$.

113 (d)

The electron placed in the path of electromagnetic wave will experience force due to electric field vector and not due to magnetic field vector

115 (b)

$$c = \frac{1}{\sqrt{\mu_0 \epsilon_0}} \text{ and } c = E_0/B_0$$

116 (b)

Velocity of light in a medium,

$$c = \frac{1}{\sqrt{\mu_0 \epsilon_0 \mu_r \epsilon_r}} = \frac{1}{\sqrt{\mu \epsilon}}$$

118 (c)

Here, $kx = \theta$ or $k = \theta/x$

And $\omega t = \theta_0$ or $\omega = \theta_0/t$

$\therefore k/\omega = t/x = 1/(x/t) = \frac{1}{v}$, where v is the

velocity of electromagnetic wave, which is independent of wavelength of wave but depends upon the nature of medium of propagation of wave

119 (d)

Ultraviolet is absorbed by the ozone layer.

121 (b)

Let E = Energy falling on the surface per second = 10 J

Momentum Of photons

$$p = \frac{h}{\lambda} = \frac{h}{(c_1 \nu)}$$

$$= \frac{h\nu}{c} = \frac{E}{c}$$

On reflection,

Change in momentum per second = $2p = \frac{2E}{c}$

We know that,

Change in momentum per second = force

$$F = \frac{2E}{c} = \frac{2 \times 10}{3 \times 10^8}$$

$$= 6.7 \times 10^{-8} \text{ N}$$

122 (b)

$$\nu_{\text{ferrite}} = \frac{c}{\sqrt{\mu_r \epsilon_r}} = \frac{3 \times 10^8}{\sqrt{10 \times 10^{33}}} = 3 \times 10^6 \text{ ms}^{-1}$$

$$\lambda_{\text{ferrite}} = \frac{\nu_{\text{ferrite}}}{\nu} = \frac{3 \times 10^6}{90 \times 10^6} = 3.33 \times 10^{-2} \text{ m}$$

123 (a)

The electromagnetic theory of light failed to explain photoelectric effect.

126 (d)

Electromagnetic Waves are not deflected in electric and magnetic fields.

128 (b)

The wavelength of X-rays is of the order of 1 \AA to 100 \AA . The wavelength of radiowaves is of the order of 10^9 \AA to 10^{14} \AA . The wavelength of microwaves is of the order of 10^7 \AA to 10^9 \AA .

Thus, $\lambda_X < \lambda_M < \lambda_R$

The waves with less wave length will have more energy.

Hence,

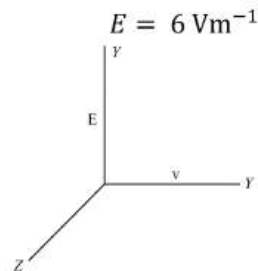
$$E_X > E_M > E_R$$

129 (a)

The frequency of Electromagnetic Wave along y -direction

$$\nu = 30 \text{ MHz}$$

The electric field component of the wave along y -direction.



In Electromagnetic, the ratio of the amplitudes of electric and magnetic field is always constant and it is equal to velocity of the Electromagnetic Waves.

$$\text{i.e., } \frac{E}{B} = c$$

$$\text{or } B = \frac{E}{c} = \frac{6}{3 \times 10^8}$$

$$\text{or } B = 2 \times 10^{-8} \text{ T}$$

130 (b)

Ozone layer blocks the high energy radiations like UV ($3 \times 10^{-7} \text{ m}$)

134 (c)

The relation between electric field vector \mathbf{E} , the displacement vector \mathbf{D} and the polarization vector

\mathbf{P} for a dielectric placed in electric field \mathbf{E} is given by $\mathbf{D} = \epsilon_0 \mathbf{E} + \mathbf{P}$.

135 (d)

Given refractive index

$$n = 1.5$$

Permeability $\mu_0 = 5 \times 10^{-7}$

$$n = \sqrt{\mu_r \epsilon_r}$$

$$\epsilon_r = \frac{n^2}{\mu_r}$$

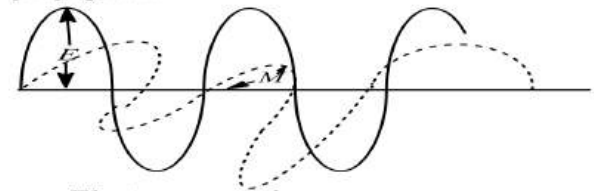
$$\text{or } \rho = \frac{n^2 \mu_0}{\mu} \quad \left(\because \mu_r = \frac{\mu}{\mu_0} \right)$$

$$\text{or } \epsilon_r = \frac{(1.5)^2 \times 4\pi \times 10^{-7}}{5 \times 10^{-7}}$$

$$\text{or } \epsilon_r = 6$$

137 (c)

The given wave in an Electromagnetic Waves. Electromagnetic radiation is a self propagating wave in space with electric and magnetic components. These components oscillate at right angles to each other and to the direction of propagation.



Electromagnetic wave

Hence, \mathbf{B} is along the z -axis at that time.

ELECTROMAGNETIC WAVES

Assertion - Reasoning Type

This section contain(s) 0 questions numbered 1 to 0. Each question contains STATEMENT 1(Assertion) and STATEMENT 2(Reason). Each question has the 4 choices (a), (b), (c) and (d) out of which **ONLY ONE** is correct.

- a) Statement 1 is True, Statement 2 is True; Statement 2 is correct explanation for Statement 1
- b) Statement 1 is True, Statement 2 is True; Statement 2 is **not** correct explanation for Statement 1
- c) Statement 1 is True, Statement 2 is False
- d) Statement 1 is False, Statement 2 is True

1

Statement 1: If earth did not have atmosphere, its average surface temperature would be lower than what is now

Statement 2: Green house effect of the atmosphere would be absent if earth did not have atmosphere

2

Statement 1: The electromagnetic wave is transverse in nature

Statement 2: The waves propagates in straight line

3

Statement 1: X-ray astronomy is possible only from satellites orbiting the earth

Statement 2: Efficiency of X-rays telescope is large as compared to any other telescope

4

Statement 1: X – ray Astronomy is possible only from satellites orbiting the earth.

Statement 2: Efficiency of X – rays telescope is large as compared to any other telescope.

5

Statement 1: Ultraviolet radiations being higher frequency waves are dangerous to human being

Statement 2: Ultraviolet radiations are absorbed by the atmosphere

6

Statement 1: Television signals are received through sky-wave propagation



Statement 2: The ionosphere reflects electromagnetic waves of frequencies greater than a certain critical frequency

7

Statement 1: For cooking in a microwave oven, food is always kept I metal containers.

Statement 2: The energy of microwave is easily transferred to the food in metal container.

8

Statement 1: Electromagnetic waves exert radiation pressure.

Statement 2: Electromagnetic waves carry energy.



ELECTROMAGNETIC WAVES

: ANSWER KEY :

1)	a	2)	b	3)	b	4)	d
5)	b	6)	b	7)	d	8)	a



ELECTROMAGNETIC WAVES

: HINTS AND SOLUTIONS :

- 1 **(a)**
Earth is heated by sun's infrared radiation. The earth also emits radiation most in infrared region. These radiations are reflected back due to heavy gases like CO_2 by atmosphere. These back radiation keep the earth's surface warm at night. This phenomenon is called green house effect. When the atmosphere were absent then temperature of earth falls
- 2 **(b)**
The electromagnetic wave contains sinusoidally time varying electric and magnetic fields which act perpendicularly to each other as well as at right angle (90°) to the direction of propagation of waves, so it is quite clear that electromagnetic waves are transverse in nature. The field may be represented as
- $$E = E_0 \sin \omega \left(t - \frac{x}{v} \right)$$
- $$B = B_0 \sin \omega \left(t - \frac{x}{v} \right)$$
- 3 **(b)**
The earth's atmosphere is transparent to visible light and radio waves, but absorbs X-rays. Thus, X-rays. Thus, X-rays telescope cannot be used on surface of earth
- 4 **(d)**
- 5 **(b)**
Ultraviolet radiations are electromagnetic waves. The wavelength of these waves ranges between 4000\AA to 100\AA that is of smaller wavelength and higher frequency. They are absorbed by ozone layer of stratosphere in atmosphere. They cause skin disease and they are harmful to eye and cause permanent blindness
- 6 **(b)**
In sky wave propagation the radio waves which have frequency between 2 MHz to 30 MHz, are reflected back to the ground by the ionosphere. But radio waves having frequency greater than 30 MHz cannot be reflected by the ionosphere because at this frequency they penetrates the ionosphere. It makes the sky wave propagation less reliable for propagation of TV signal having frequency greater than 30 MHz
- Critical frequency is defined as the highest frequency that is returned to the earth by the ionosphere. Thus, above this frequency a wave whether it is electromagnetic will penetrate the ionosphere and in not reflected by it

